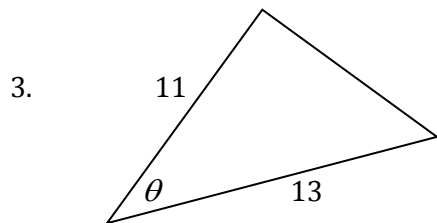
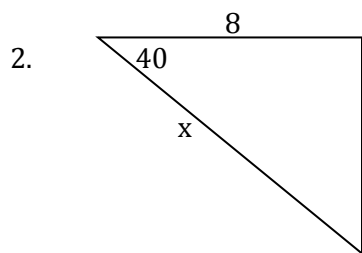
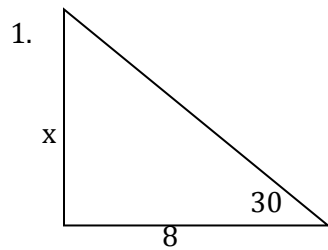
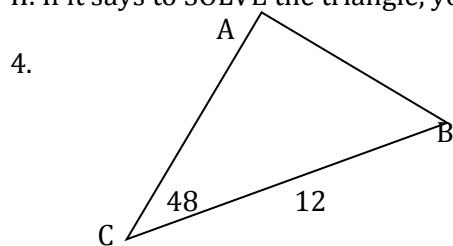


Unit 2 Day 1 HW(1)

I. Find the missing side or angle.



II. If it says to SOLVE the triangle, you want all 3 sides and all 3 angles.



III. Find the remaining trig ratios

5. $\cos \theta = \frac{4}{\sqrt{41}}$

6. $\csc \theta = \frac{41}{9}$

7. $\tan \theta = \frac{5}{13}$