

Find the values of the variables. Figures are not drawn to scale.

1. $x = \underline{\quad}$ $y = \underline{\quad}$ $z = \underline{\quad}$

2. $x = \underline{\quad}$

3. $x = \underline{\quad}$

4. $x = \underline{\quad}$

5. $x = \underline{\quad}$

6. $x = \underline{\quad}$

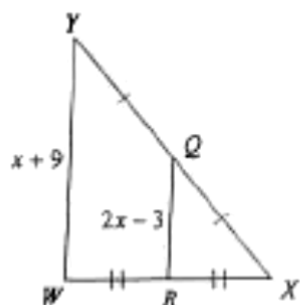
7. $x = \underline{\quad}$ $y = \underline{\quad}$

8. $x = \underline{\quad}$ $y = \underline{\quad}$

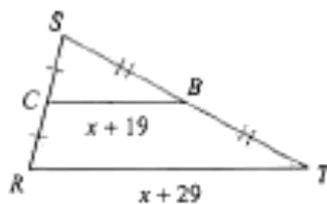
Unit 4A Day 3 HW

Solve for x .

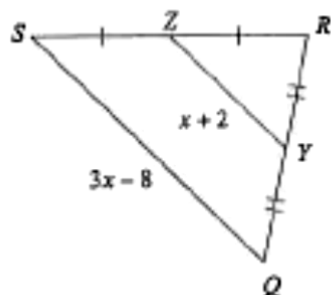
9)



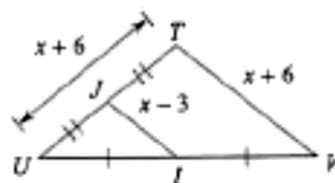
10)



11)

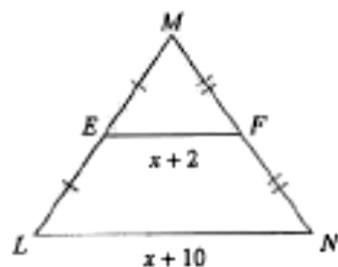


12)

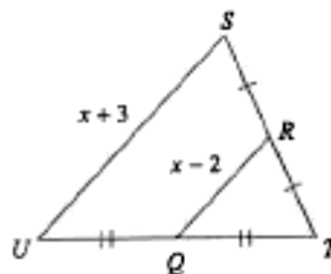


Find the missing length indicated.

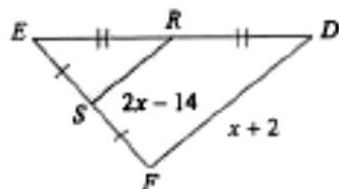
13) Find LN



14) Find RQ



15) Find SR



16) Find VW

