

State if the two triangles are congruent. If they are, state how you know.

1)



2)



3)



4)



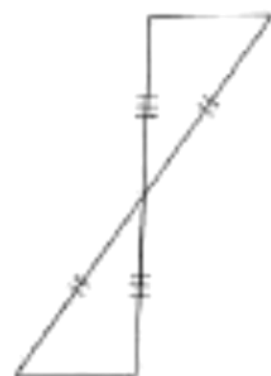
5)



6)



7)



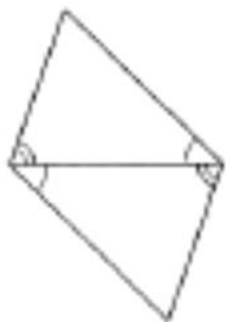
8)



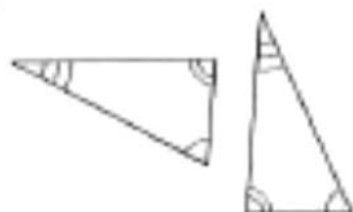
9)



10)



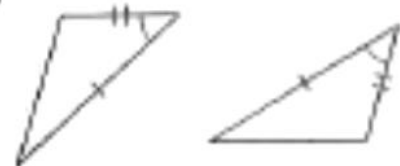
11)



12)



13)



14)



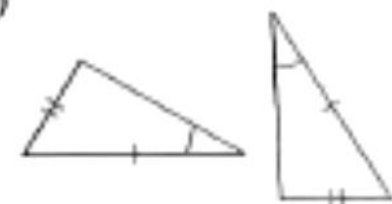
15)



16)



17)



18)



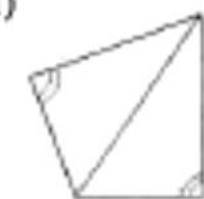
19)



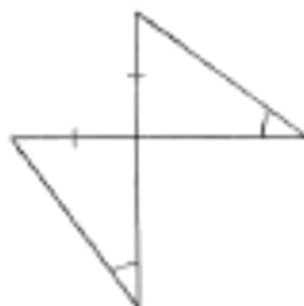
20)



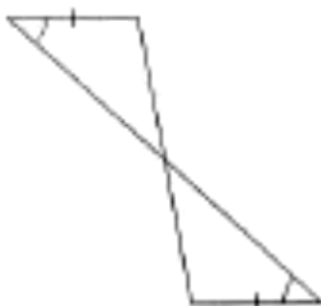
21)



22)



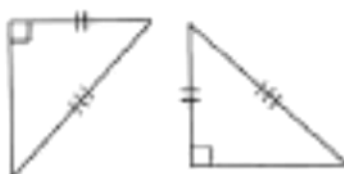
23)



24)



25)



26)



27)



28)



29)



30)



31)



